



ENTRY TEST

Academic Session 2019-20

GRADE IV

MATHEMATICS

Name: _____

Date: _____

Time Allowed: 45 minutes

Total Marks	Marks Obtained	Percentage
25		

Remarks:

Q1) Write the following numerals in words.

/2

a) 509 _____

b) 735 _____

Q2) Write the following in numerals.

/2

a) Two hundred and seven _____

b) Five hundred and nineteen _____

Q3) Solve the following. Show your working:

/4

a) $209 + 317 =$ _____

Working

b) $785 - 534 =$ _____

Working

b) $115 \times 8 =$ _____

Working

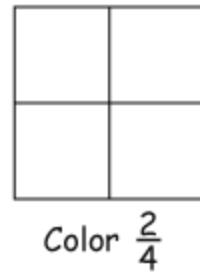
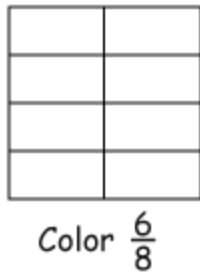
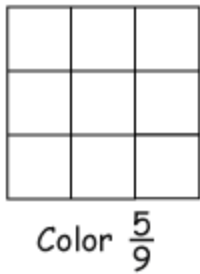
d) $144 \div 9 =$ _____

Working

Q14) I read 21 pages of my English book yesterday in just half an hour. Today I read 117 pages. What is the total number of pages that I read? (2)

Q5) There are 405 girls in a school and 21 more boys. How many boys are there in the school? /3

Q6) Write the correct fraction in front of each shape: /3



Q7) Circle the smaller fraction: /2

a) $\frac{3}{4}$, $\frac{1}{8}$

b) $\frac{23}{10}$, $\frac{7}{20}$

Q8) Solve the following: /2

a) $\frac{8}{13} - \frac{2}{13} = \text{---}$

b) $\frac{3}{8} + \frac{1}{4} = \text{---}$

Q9) Write "am" or "pm": /2

a) Jogging time in the **morning** _____

b) Knitting class in the **evening** _____

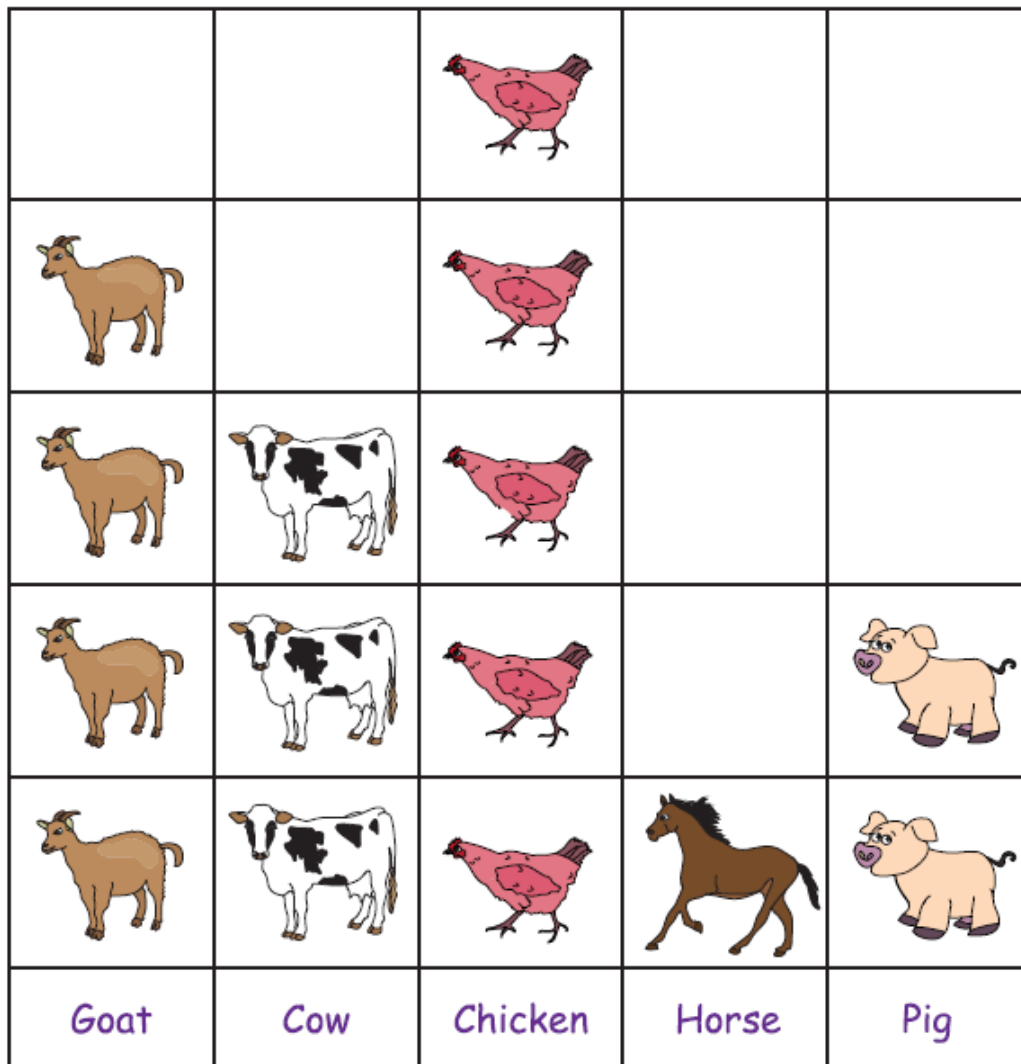
c) Two hours **after midnight** _____

d) The sun **rise** _____



Q10) Richard, a farm owner owns some farm animals. The pictograph shows the number of animals he has in his farm. Use the pictogram to answer the following questions: /3

Richard's Farm Animals



- a) Which animal is the fewest? _____
- b) How many goats are there? _____
- c) Are there more chickens or cows? _____
- d) Which animal counts to 2? _____
- e) How many animals are there in the farm? _____
- f) Which animal is the largest in number? _____