



ENTRY TEST

Academic Session 2019-20

Maths

Name: _____


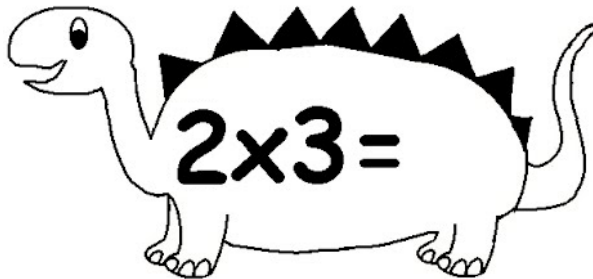

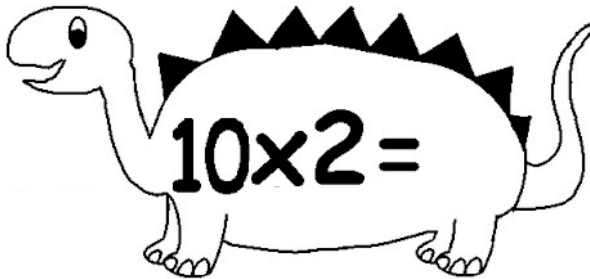

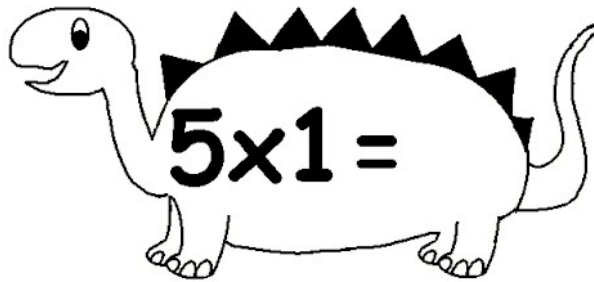
Class:2

Time Allowed:45 Minutes

Total Marks:25





Q.1 Fill in the following time tables

/6



Q.2 Division sums

/4



Q.3 Solve the following sums by looking at their signs.

/4.5

$$+ \begin{array}{r} 43 \\ \underline{22} \end{array}$$

$$+ \begin{array}{r} 36 \\ \underline{14} \end{array}$$

$$- \begin{array}{r} 54 \\ \underline{21} \end{array}$$

$$- \begin{array}{r} 35 \\ \underline{23} \end{array}$$

$$+ \begin{array}{r} 63 \\ \underline{38} \end{array}$$

$$- \begin{array}{r} 75 \\ \underline{32} \end{array}$$

$$+ \begin{array}{r} 72 \\ \underline{51} \end{array}$$

$$- \begin{array}{r} 82 \\ \underline{44} \end{array}$$

$$+ \begin{array}{r} 92 \\ \underline{51} \end{array}$$

Q.4 Order the numbers from least to greatest.

/2

56, 22, 35, 33, 87

_____ , _____ , _____ , _____ , _____

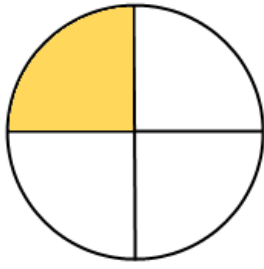
63, 98, 97, 45, 64

_____ , _____ , _____ , _____ , _____

Q.5 Circle the right fraction.

/1.5

1.



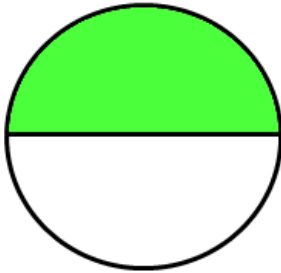
$\frac{1}{2}$

$\frac{1}{3}$

$\frac{1}{4}$

$\frac{3}{4}$

2.



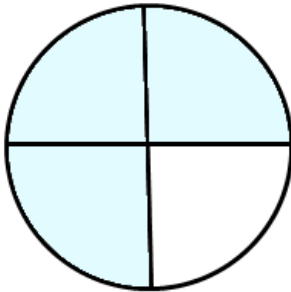
$\frac{2}{3}$

$\frac{1}{3}$

$\frac{1}{2}$

$\frac{1}{4}$

3.



$\frac{3}{4}$


$\frac{2}{3}$

$\frac{2}{4}$


$\frac{1}{4}$

Q.6 Draw the hands to show tell time.


/1.5



5:00



2:30



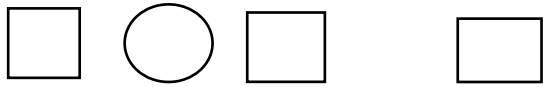
12:30

Q7. Solve the following word problems:

/4

Mother makes 12 cupcakes. Father buys 6 more cupcakes.

How many cupcakes are there altogether?



There are cupcakes altogether.

Ali has 17 cookies. Ayan ate 5 cookies. How many cookies were left ?



There are cookies left.

Q 8. Place value

/ 1.5

57 There are ____ tens and ____ ones

60 There are ____ tens and ____ ones

12 There are ____ tens and ____ ones