



ENTRY TEST

Academic Session 2019-20

Maths

Name: _____

Class:1

Time Allowed:45 Minutes

Total Marks:25

Q.1 Fill in the missing numbers

/ 10

1 2 5 6 8 10

13 14 16 17 19 20

22 23 25 27 28 29

31 32 33 35 36 40

42 44 45 47 48 49

51 52 53 57 58 60

61 64 66 68 69 70


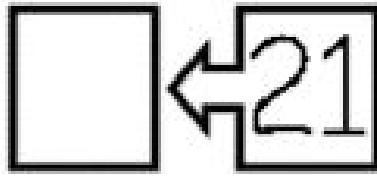
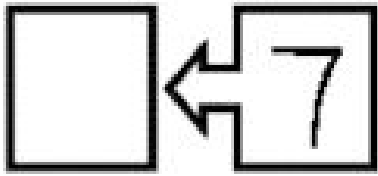
72 73 74 75 77 80

81 82 83 86 89 90

94 95 96 97 98 99

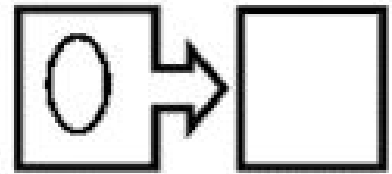

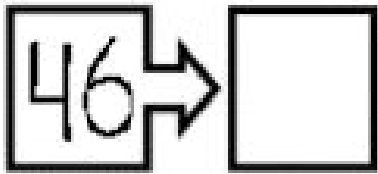
Q.2 A. What comes before

/1.5



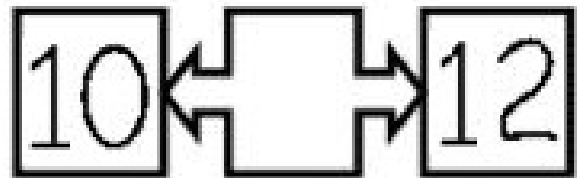
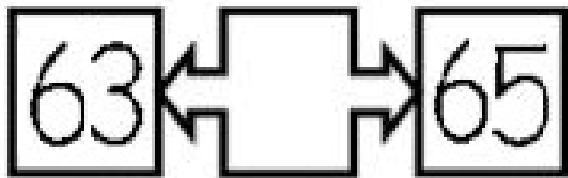
B. What comes after

/1.5



C. What comes in between

/ 1.



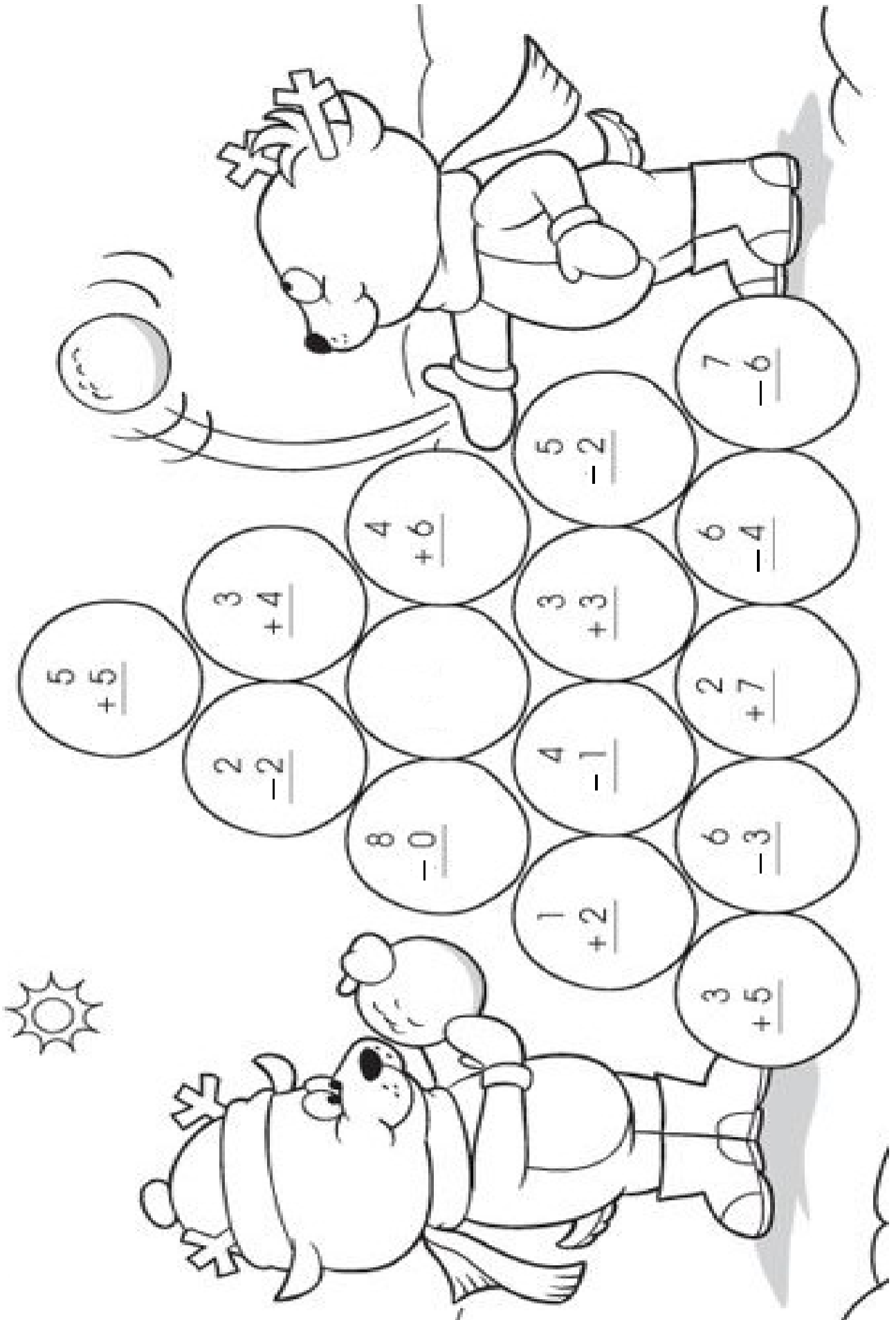
Q.3 Draw the following shapes

/ 1.5

Square	Circle	rectangle

Q.3 look for the sign to add or subtract

/ 7



Q.5 Write the following numbers in words.

/ 2.5

Number	Words
15	
40	
88	
54	
26	